
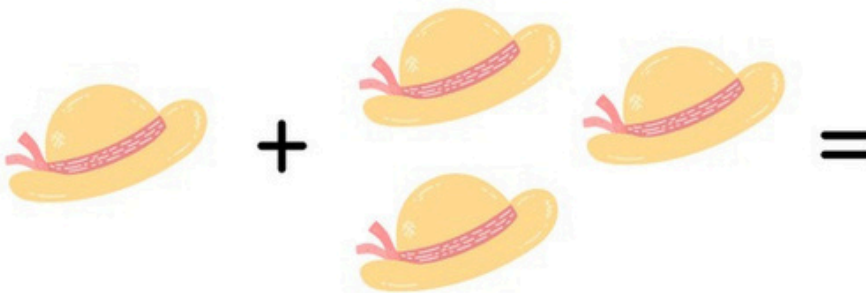



NAME _____

DATE _____

SUMMER ADDITION



NAME _____

DATE _____

Let's Count the Flowers

Take a look at the flower pictures below. Count and write down the number of flowers in each pot.



$$1 + 2 = \dots\dots\dots$$



$$1 + 1 = \dots\dots\dots$$



$$3 + 2 = \dots\dots\dots$$



$$4 + 1 = \dots\dots\dots$$



$$2 + 3 = \dots\dots\dots$$

NAME _____

DATE _____



$$3 + 1 = \dots\dots\dots$$



$$1 + 3 = \dots\dots\dots$$



$$2 + 2 = \dots\dots\dots$$



$$3 + 3 = \dots\dots\dots$$



$$1 + 4 = \dots\dots\dots$$



$$2 + 4 = \dots\dots\dots$$