



COMPARING FRACTIONS

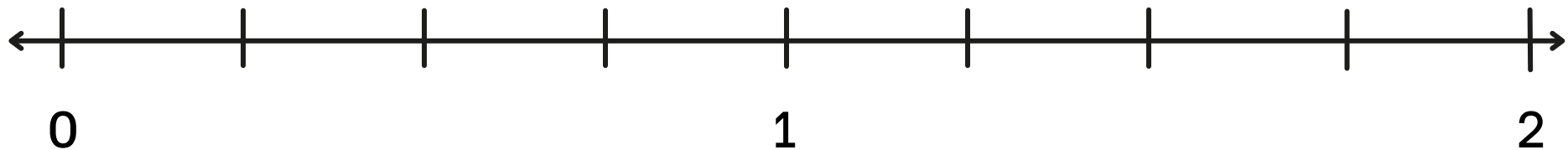


Name:

Date:

Place each of the fractions shown below on the number line provided.

There is space provided on the next two pages for you to use the DRAW function to show your working out.



$$\frac{2}{8}$$

$$\frac{2}{4}$$

$$1\frac{3}{4}$$

$$1\frac{4}{12}$$


$$\frac{6}{4}$$

Date:



Name:

WORKING OUT SPACE




Date:



Name:

WORKING OUT SPACE





COMPARING FRACTIONS



ANSWER KEY

Place each of the fractions shown below on the number line provided.

There is space provided on the next two pages for you to use the DRAW function to show your working out.

